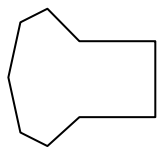




Determine which letter BEST represents the shapes that were used to create the figure shown.

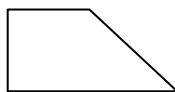
**Answers**

1)



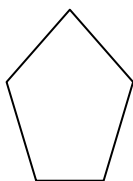
- A. A Heptagon and a Rectangle
- B. A Square and a Rectangle
- C. A Triangle and a Hexagon
- D. A Rectangle and a Pentagon

2)



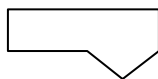
- A. A Square and a Quadrilateral
- B. A Quadrilateral and a Pentagon
- C. A Square and a Triangle
- D. A Square and a Heptagon

3)



- A. A Triangle and a Quadrilateral
- B. A Hexagon and an Octagon
- C. A Pentagon and a Heptagon
- D. A Pentagon and a Hexagon

4)



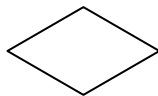
- A. A Triangle and an Octagon
- B. A Square and an Octagon
- C. A Square and a Pentagon
- D. A Triangle and a Quadrilateral

5)



- A. A Rectangle and a Pentagon
- B. A Pentagon and a Hexagon
- C. A Triangle and a Rectangle
- D. A Quadrilateral and an Octagon

6)



- A. A Hexagon and a Heptagon
- B. A Square and a Heptagon
- C. A Triangle and a Triangle
- D. A Square and a Rectangle

7)



- A. A Quadrilateral and a Hexagon
- B. A Rectangle and a Heptagon
- C. A Quadrilateral and a Heptagon
- D. A Square and a Heptagon

8)



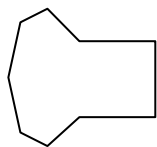
- A. A Square and an Octagon
- B. A Triangle and a Quadrilateral
- C. A Square and a Hexagon
- D. A Square and a Rectangle

- 1. \_\_\_\_\_
- 2. \_\_\_\_\_
- 3. \_\_\_\_\_
- 4. \_\_\_\_\_
- 5. \_\_\_\_\_
- 6. \_\_\_\_\_
- 7. \_\_\_\_\_
- 8. \_\_\_\_\_



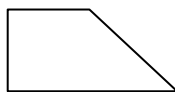
Determine which letter BEST represents the shapes that were used to create the figure shown.

1)



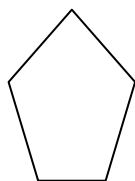
- A. A Heptagon and a Rectangle
- B. A Square and a Rectangle
- C. A Triangle and a Hexagon
- D. A Rectangle and a Pentagon

2)



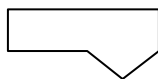
- A. A Square and a Quadrilateral
- B. A Quadrilateral and a Pentagon
- C. A Square and a Triangle
- D. A Square and a Heptagon

3)



- A. A Triangle and a Quadrilateral
- B. A Hexagon and an Octagon
- C. A Pentagon and a Heptagon
- D. A Pentagon and a Hexagon

4)



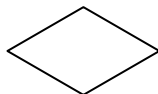
- A. A Triangle and an Octagon
- B. A Square and an Octagon
- C. A Square and a Pentagon
- D. A Triangle and a Quadrilateral

5)



- A. A Rectangle and a Pentagon
- B. A Pentagon and a Hexagon
- C. A Triangle and a Rectangle
- D. A Quadrilateral and an Octagon

6)



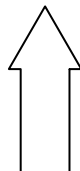
- A. A Hexagon and a Heptagon
- B. A Square and a Heptagon
- C. A Triangle and a Triangle
- D. A Square and a Rectangle

7)



- A. A Quadrilateral and a Hexagon
- B. A Rectangle and a Heptagon
- C. A Quadrilateral and a Heptagon
- D. A Square and a Heptagon

8)



- A. A Square and an Octagon
- B. A Triangle and a Quadrilateral
- C. A Square and a Hexagon
- D. A Square and a Rectangle

**Answers**

- 1. **A**
- 2. **C**
- 3. **A**
- 4. **D**
- 5. **C**
- 6. **C**
- 7. **A**
- 8. **B**